

Dave Williams

October 23, 2008

University of Saskatchewan  
Department of Electrical Engineering

EE301 Electricity, Magnetism and Fields  
Midterm Examination  
Professor Robert E. Johanson

Welcome to the EE301 Midterm. This is a closed book and closed notes examination. A formulae sheet is attached. You may use a calculator. The examination lasts **1:25** hour.

Each problem is worth the same; subparts of a problem might be weighted differently. Show your work and briefly explain what you are doing if appropriate; credit will be given only if the steps leading to the answer are clearly shown. If a symmetry argument is used, it is sufficient to write "By symmetry we know that...". Partial credit will be given for partially correct answers. Be reasonably neat; credit will not be given for illegible answers.

Answer all 4 of the problems.

None of the problems require intricate mathematical manipulations.

### Problem 1

A charge of 40 nC is at (2, 3, 1) and a charge of -100 nC is at (-2, 1, -3) (Cartesian coordinates, distances in meters). Answer the following questions.

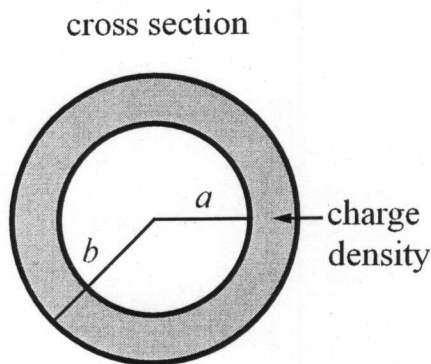
- Determine the electric field vector at the point (1, 1, 0).
- Determine the electric potential at the point (1, 1, 0).
- If another charge of 10 nC is placed at the point (1, 1, 0), what force acts on this charge and what is the potential energy of the charge?

### Problem 2

- A charge distribution expressed in spherical coordinates depends only on the variable  $r$ . What does symmetry imply about the electric field  $\vec{E}(r, \theta, \phi)$  produced by this charge?
- There is a constant space charge density  $\rho_0$  for  $a < r < b$  (spherical coordinates) and no space charge outside of this region. That is

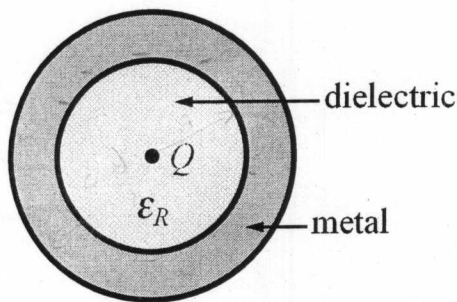
$$\rho_V = \begin{cases} 0 & \text{for } r < a \\ \rho_0 & \text{for } a < r < b \\ 0 & \text{for } r > b \end{cases}$$

Use Gauss's law to calculate the electric field in all three regions.



### Problem 3

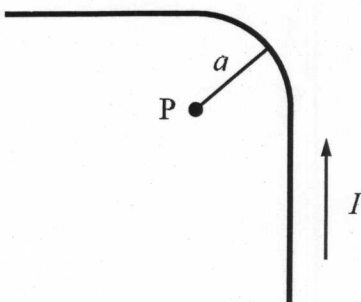
A hollow metal sphere with inner radius  $a$  and wall thickness  $d$  contains a dielectric with dielectric constant  $\epsilon_R$ . At the very center is a charge  $Q$ . The metal is not connected to ground.



- Determine the electric field inside the metal, inside the dielectric, and outside the sphere.
- Determine the electric potential as a function  $r$  everywhere. Let the potential at infinity be 0 V.

### Problem 4

The middle of an infinitely long wire is bent in a quarter circle as shown; the radius of the bend is  $a$ . A current  $I$  flows in the wire. Calculate the magnetic field vector at the center of the circular bend, point  $P$ .



You might be interested to know that

$$\int_0^{\infty} \frac{1}{(a^2 + x^2)^{3/2}} dx = \frac{1}{a^2}$$

although if you are really clever you won't need it.